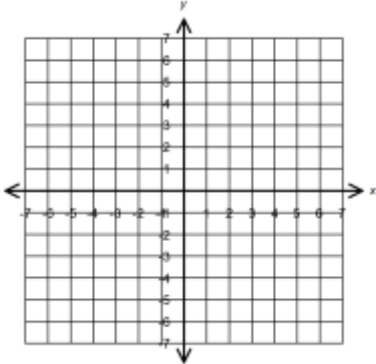


Remediation – Graphing Inequalities in Two Variables (Assessment)

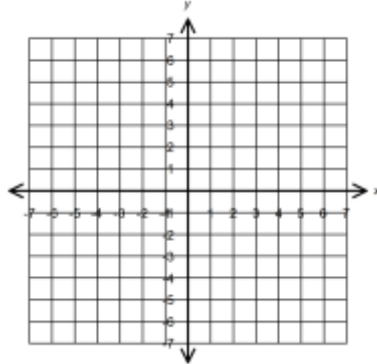
There is no online form for this topic at this time. Please print and complete this after you have done the practice problems for the module.

Directions: Please solve the following inequalities by graphing.

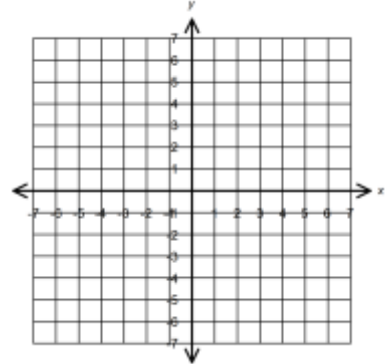
1. $y \geq -x$



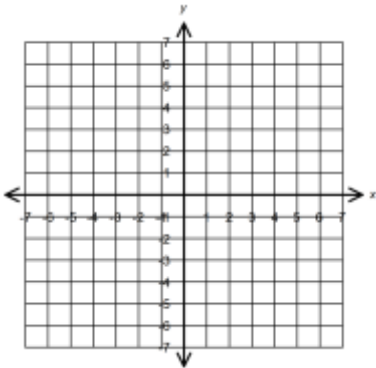
2. $-3y > x$



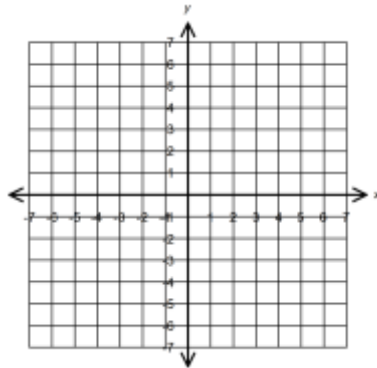
3. $x \leq -2.5$



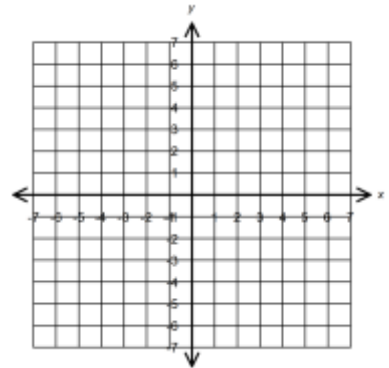
4. $y < 6 - \frac{1}{2}x$



5. $-5x - 5y \geq 25$

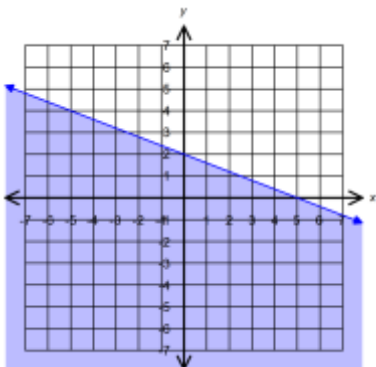


6. $y > 2$

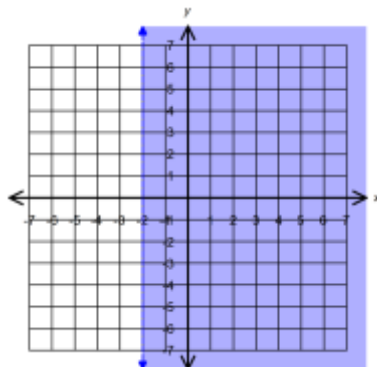


Directions: Please write an inequality for each of the given graphs.

7. _____



8. _____



9. _____

